

TEK 5010 MAS

Lecture 10: Cooperative game theory

Exercise: Cooperative games I

Question 1

a) Calculate the values of the following coalitions...

Marginal contribution net is given

$b \rightarrow 4$	rule 1
$c \rightarrow 6$	rule 2
$a \wedge b \rightarrow 7$	rule 3
$b \wedge c \rightarrow 3$	rule 4

Find the v 's (the characteristic function)

$$v(\emptyset) = 0 \text{ (empty coalition)}$$

$$v(\{a\}) = 0 \text{ (no rule apply)}$$

$$v(\{b\}) = 4 \text{ (rule 1)}$$

$$v(\{c\}) = 6 \text{ (rule 2)}$$

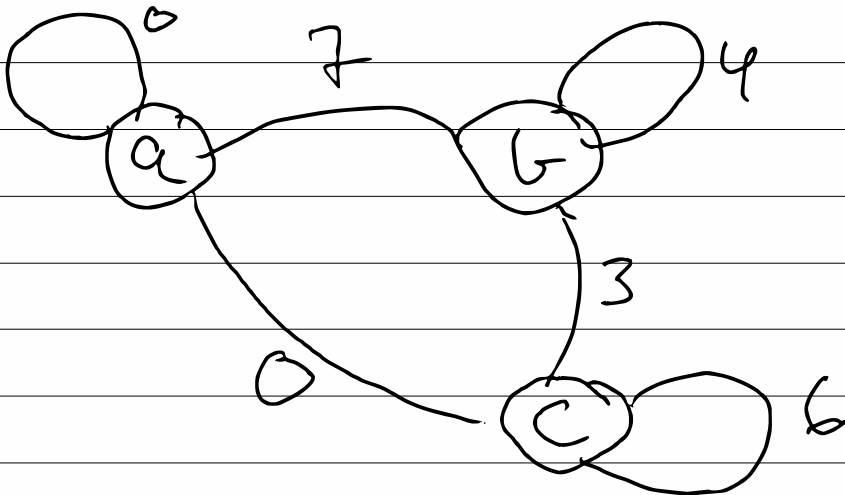
$$v(\{a, b\}) = 4 + 7 = 11 \text{ (Rule 1 \& 3)}$$

$$v(\{a, c\}) = 6 \text{ (Rule 2)}$$

$$v(\{b, c\}) = 4 + 6 + 3 = 13 \text{ (Rule 1, 2 \& 4)}$$



$$v(\{a, b, c\}) = 4 + 6 + 7 + 3 = 20 \text{ (Rule 1, 2, 3, 4)}$$

b) Draw the weighted graph representing this game



c) Is this game stable?

This game is stable if we have a non-empty core

	a	b	c	
level 1	0	4	6	Singleton C
				
level 2	11		13	
				
level 3		20		Grand C

lets look at the grand coalition first

$a=0$	a	b	c	
	0	20	0	}
	⋮	⋮	⋮	
	0	15	5	
	0	14	6	}
	⋮	⋮	⋮	
	1	⋮	⋮	
	0	11	9	
	0	10	10	
	⋮	⋮	⋮	}
	0	0	20	

c objects

core is non-empty

ab objects

$a=1$	1	19	0	c objects
	1	13	6	}
	1	10	9	
	1	0	19	

core

ab objects

There exist some non-empty core, i.e. the game is stable

d) Calculate the Shapley value for each player in this game.

$$sh_i = \frac{1}{|A_S|!} \sum_{\sigma \in \Pi(A_S)} \pi_i(\sigma)$$

where $\Pi(A_S)$ is the set of all possible orderings of coalition C

σ is an ordering of a coalition

$$\pi_i(C) = v(C \cup \{i\}) - v(C)$$

given that $C \subseteq A_S \setminus \{i\}$,
i.e. the marginal contribution of agent i to C

Two ways of calculating Shapley

1) Enumeration

2) from the induced subgraph

* Enumeration

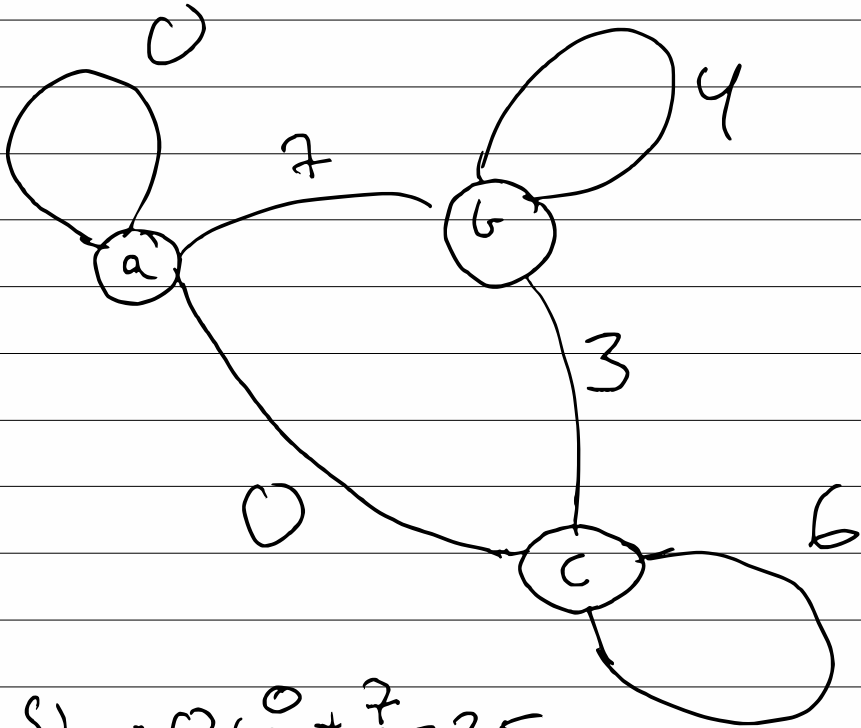
Different ordering
(permutations)

Marginal contribution
of players

	a	b	c
a b c	0	11	9
a c b	0	14	6
b a c	7	4	9
b c a	7	4	9
c a b	0	14	6
c b a	7	7	6

$$Sh_i \Rightarrow \frac{21}{6} = 3.5 \quad \frac{54}{6} = 9 \quad \frac{45}{6} = 7.5$$

* from the induced subgraph



$$sh_a = 0 + \frac{0}{2} + \frac{7}{2} = 3,5$$

$$sh_b = 4 + \frac{7}{2} + \frac{3}{2} = 9$$

$$sh_c = 6 + \frac{0}{2} + \frac{3}{2} = 7,5$$